

14.8. Lagrange multipliers

★ Thm (Method of Lagrange multipliers)

Given a differentiable function $f(x, y, z)$ with a constraint $g(x, y, z) = 0$, the extreme values can be found as follows if they exist.

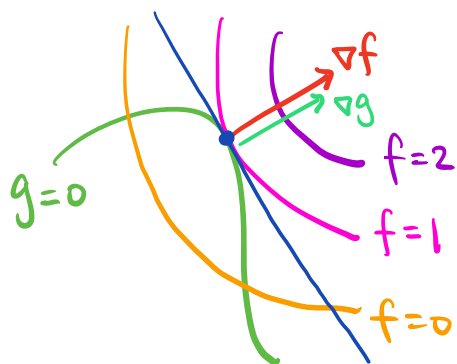
Step 1. Solve the equations $\nabla f = \lambda \nabla g$ and $g = 0$.

Step 2. Evaluate $f(x, y, z)$ at all solutions.

Step 3. Compare all values from Step 2.

maximum = the largest of these values
minimum = the smallest of these values

* Explanation:



At extrema, level curves (or surfaces) of f and g must be tangent.

$\Rightarrow \nabla f$ and ∇g are parallel

$\Rightarrow \nabla f = \lambda \nabla g$

Note (1) In Math 215, you can always assume that extreme values exist. In general, however, there may be no extreme values.

(2) Step 1 often involves heavy algebra.

Ex Find the minimum value of $x^2 + y^2 + z$ on the plane

$$2x + 2y + z = 9$$

Sol 1 (Lagrange multipliers)

$$\text{Constraint : } 2x + 2y + z = 9 \rightsquigarrow 2x + 2y + z - 9 = 0$$

$$\text{Set } f(x, y, z) = x^2 + y^2 + z \text{ and } g(x, y, z) = 2x + 2y + z - 9.$$

$$\text{Solve } \nabla f = \lambda \nabla g \text{ and } g = 0$$

$$\Rightarrow (2x, 2y, 1) = \lambda (2, 2, 1) \text{ and } 2x + 2y + z - 9 = 0$$

$$\rightsquigarrow 2x = 2\lambda, 2y = 2\lambda, 1 = \lambda, 2x + 2y + z = 9$$

$$\Rightarrow \lambda = 1, x = 1, y = 1, z = 9 - 2x - 2y = 5$$

$$\text{The minimum value is } f(2, 2, 5) = \boxed{7}$$

Sol 2 (Removing the constraint)

$$2x + 2y + z = 9 \rightsquigarrow z = 9 - 2x - 2y$$

$$\Rightarrow x^2 + y^2 + z = x^2 + y^2 + 9 - 2x - 2y.$$

We find the minimum of $h(x, y) = x^2 + y^2 + 9 - 2x - 2y$ on \mathbb{R}^2 .

Since \mathbb{R}^2 is open, the minimum is at a critical point.

$$\Rightarrow \nabla h = (0, 0) \Rightarrow (2x - 2, 2y - 2) = 0 \Rightarrow x = 1, y = 1.$$

$$\Rightarrow \text{The minimum is } h(1, 1) = \boxed{7}$$

Note It's not always possible to remove the constraint in this way.

Ex Find the shortest distance from the origin to the surface $2x + 4y + z^2 = 20$.

Sol Distance from the origin is $\sqrt{x^2 + y^2 + z^2}$.

We find the minimum of $x^2 + y^2 + z^2$ subject to the constraint $2x + 4y + z^2 - 20 = 0$

Set $f(x, y, z) = x^2 + y^2 + z^2$ and $g(x, y, z) = 2x + 4y + z^2 - 20$

Solve $\nabla f = \lambda \nabla g$ and $g = 0$

$\Rightarrow (2x, 2y, 2z) = \lambda(2, 4, 2z)$ and $2x + 4y + z^2 - 20 = 0$

$\sim 2x = 2\lambda, 2y = 4\lambda, 2z = 2\lambda z, 2x + 4y + z^2 = 20$.

Case 1 $z = 0$: $x = \lambda, y = 2\lambda, 2x + 4y = 20$

$\Rightarrow 2\lambda + 4 \cdot 2\lambda = 20 \Rightarrow 10\lambda = 20 \Rightarrow \lambda = 2$

$\Rightarrow \underline{x = 2, y = 4, z = 0}$.

Case 2 $z \neq 0$: $2z = 2\lambda z \Rightarrow \lambda = 1$.

$2x = 2\lambda = 2 \Rightarrow x = 1, 2y = 4\lambda = 4 \Rightarrow y = 2$

$2x + 4y + z^2 = 20 \Rightarrow 10 + z^2 = 20 \Rightarrow z = \pm\sqrt{10}$

$\Rightarrow \underline{x = 1, y = 2, z = \pm\sqrt{10}}$.

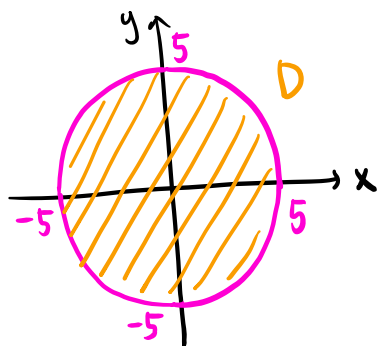
$f(2, 4, 0) = 20, f(1, 2, \sqrt{10}) = f(1, 2, -\sqrt{10}) = 15$

\Rightarrow The minimum of $f(x, y, z) = x^2 + y^2 + z^2$ is 15.

\Rightarrow The shortest distance is $\boxed{\sqrt{15}}$

Ex Find the extreme values of $6x + 8y$ on the domain given by $x^2 + y^2 \leq 25$.

Sol



D is closed and bounded.

We apply the Extreme value theorem with $f(x, y) = 6x + 8y$

Step 1. Evaluate $f(x, y)$ at all critical points.

$$\nabla f = (6, 8) \neq (0, 0) \Rightarrow \text{no critical points}$$

Step 2. Find the extrema of $f(x, y)$ on the boundary.

Set $g(x, y) = x^2 + y^2 - 25 \Rightarrow g(x, y) = 0$ on the boundary.

Solve $\nabla f = \lambda \nabla g$ and $g = 0$

$$\Rightarrow (6, 8) = \lambda (2x, 2y) \text{ and } x^2 + y^2 - 25 = 0$$

$$\sim 6 = 2\lambda x, \quad 8 = 2\lambda y, \quad x^2 + y^2 = 25$$

$$\lambda \neq 0 \Rightarrow x = \frac{3}{\lambda}, \quad y = \frac{4}{\lambda} \quad (*)$$

$$x^2 + y^2 = 25 \sim \frac{9}{\lambda^2} + \frac{16}{\lambda^2} = 25 \sim 25 = 25\lambda^2 \sim \lambda = \pm 1.$$

$$\lambda = 1 \Rightarrow x = 3, \quad y = 4, \quad \lambda = -1 \Rightarrow x = -3, \quad y = -4.$$

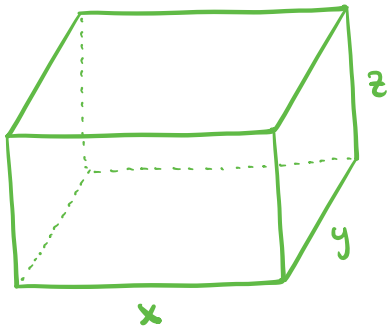
$$\underline{f(3, 4) = 50, \quad f(-3, -4) = -50}$$

Step 3. Compare all values from steps 1 and 2.

$$\boxed{\text{Maximum} = 50, \quad \text{minimum} = -50}$$

Ex Find the minimum surface area of a rectangular box with volume 1.

Sol



Width x , length y , height z

$$\Rightarrow \begin{cases} \text{Volume} = xyz = 1 \\ \text{Surface area} = 2xy + 2yz + 2zx \end{cases}$$

Set $f(x, y, z) = 2xy + 2yz + 2zx$ and $g(x, y, z) = xyz - 1$.

Solve $\nabla f = \lambda \nabla g$ and $g = 0$

$$\Rightarrow (2y + 2z, 2x + 2z, 2x + 2y) = \lambda (yz, zx, xy) \text{ and } xyz - 1 = 0$$

$$\sim 2y + 2z = \lambda yz, 2x + 2z = \lambda zx, 2x + 2y = \lambda xy, xyz = 1$$

$$\Rightarrow \lambda xyz = x(2y + 2z) = y(2x + 2z) = z(2x + 2y)$$

$$\Rightarrow 2xy + 2xz = 2xy + 2yz = 2xz + 2yz$$

$$\Rightarrow xy = yz = zx \Rightarrow \frac{xyz}{xy} = \frac{xyz}{yz} = \frac{xyz}{zx} \Rightarrow x = y = z$$

$$xyz = 1 \Rightarrow x = y = z = 1$$

The minimum is $f(1, 1, 1) = \boxed{6}$

Note Alternatively, you can remove the constraint

$xyz = 1$ by writing $z = \frac{1}{xy}$ and considering

$$2xy + 2yz + 2zx = 2xy + 2y \cdot \frac{1}{xy} + \frac{2}{xy} \cdot x = 2xy + \frac{2}{x} + \frac{2}{y}$$

on the domain $x, y > 0$.